



1. Match each whole number to its third.



VP
100/Ed

2. Ted went shopping. He bought 3 packets of stickers. He spent 18p in total.



Sam

Each pack of stickers cost 6p.



Kim

Each pack of stickers cost 7p.

Who is correct?



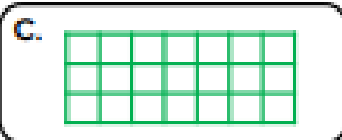


VP
100/Ed

3. Ben has used the sorting hoops to find $\frac{1}{3}$ of different numbers. Complete the statements.

A. $\frac{1}{3}$ of 15 =

B. $\frac{1}{3}$ of 21 =

4. Match each whole number to its third.



VF
11/10/2021

5. Rose went shopping. She bought 3 packets of stickers. She spent 24p in total.



Fabio

Each pack of stickers cost 7p.



Tianna

Each pack of stickers cost 8p.

Who is correct?



VF
11/10/2021

6. Mia has used the sorting hoops to find $\frac{1}{3}$ of different numbers. Find and correct her mistakes and then complete the statements.

A. $\frac{1}{3}$ of 12 =

B. $\frac{1}{3}$ of 30 =