

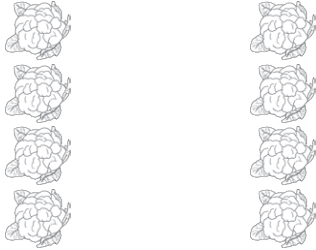


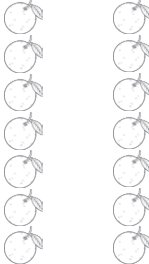


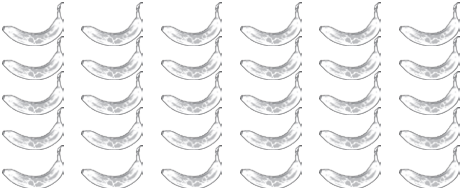


Division Using Arrays






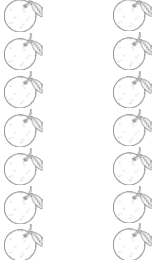
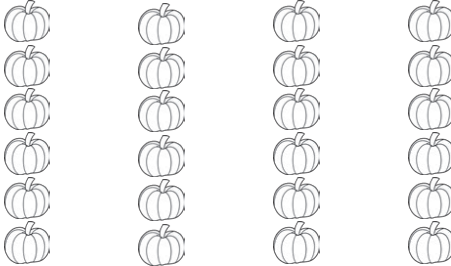

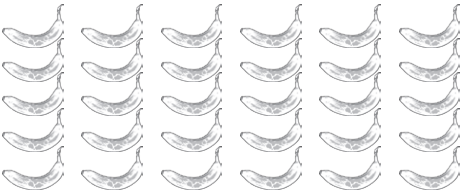
Write two division sentences for each array.
The first one has been done for you.

		
$12 \div 4 = 3$ $12 \div 3 = 4$		
		
		

Can you think of a different calculation and draw your own array?

Division Using Arrays - Answers

Write two division sentences for each array.
The first one has been done for you.

		
$12 \div 4 = 3$ $12 \div 3 = 4$	$10 \div 5 = 2$ $10 \div 2 = 5$	$8 \div 2 = 4$ $8 \div 4 = 2$
		
$18 \div 6 = 3$ $18 \div 3 = 6$	$20 \div 4 = 5$ $20 \div 5 = 4$	$14 \div 2 = 7$ $14 \div 7 = 2$
		
$24 \div 4 = 6$ $24 \div 6 = 4$	$24 \div 8 = 3$ $24 \div 3 = 8$	$30 \div 6 = 5$ $30 \div 5 = 6$

Can you think of a different calculation and draw your own array?